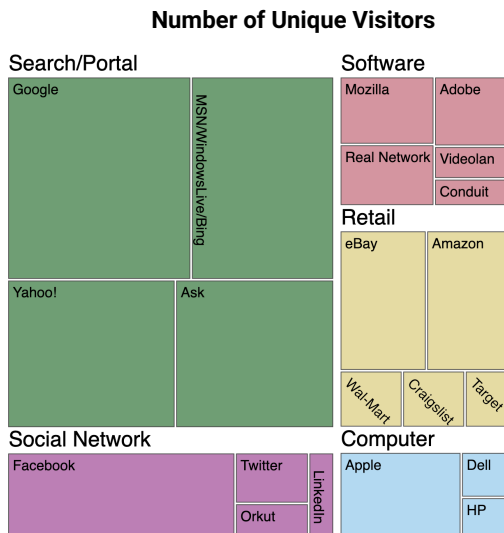


## MINI-VLAT: DATA VISUALIZATION LITERACY TEST

This test measures your ability to read and interpret charts.

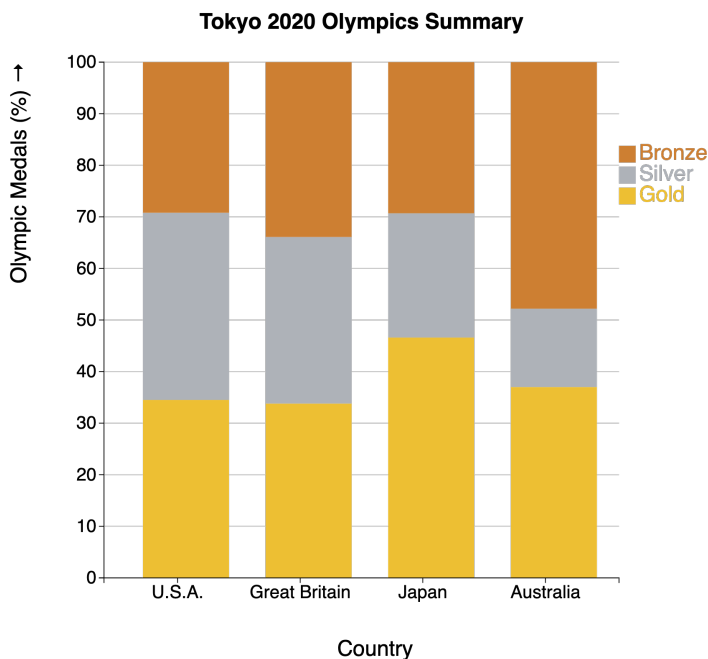
1. There are 12 questions.
2. You will get +1 point for every correct answer, and there is no negative point for an incorrect response.
3. This quiz takes 5 minutes to complete (up to 25 seconds per question).
4. If you are unsure of the answer, skip it.

### 1 eBay is nested in the Software category.


☐ True

☐ False

### 2 Which country has the lowest proportion of Gold medals?

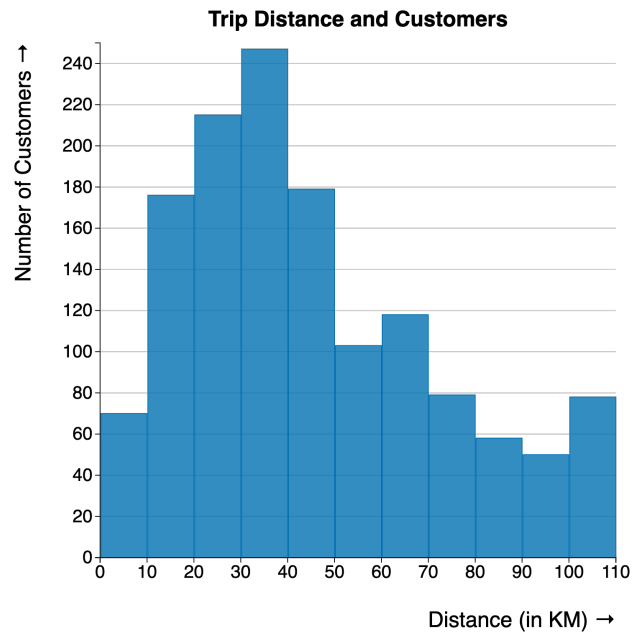

☐ USA

☐ Great Britain

☐ Japan

☐ Australia

### 3 What distance have customers traveled the most?

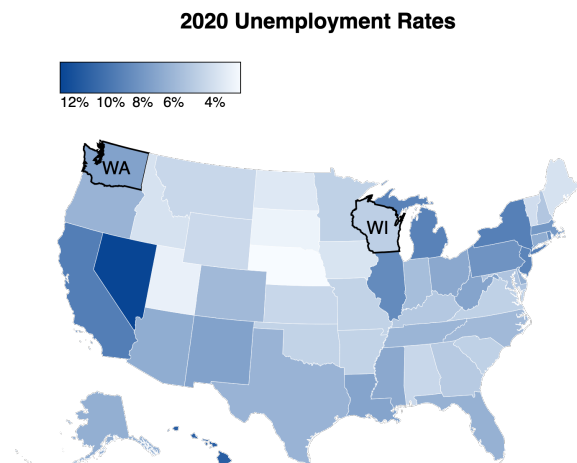

☐ 60 – 70 km

☐ 30 – 40 km

☐ 20 – 30 km

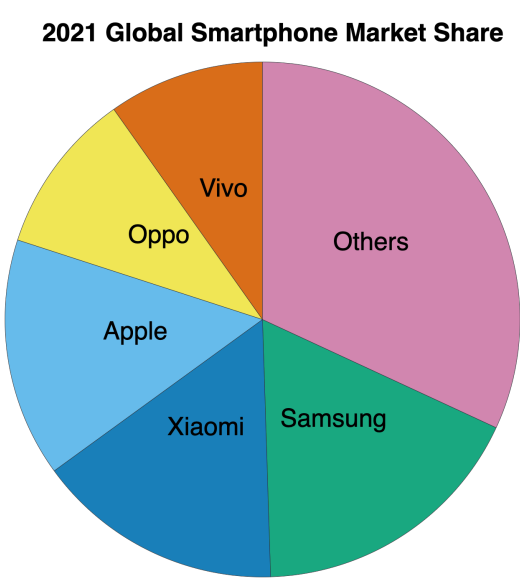
☐ 50 – 60 km

### 4 In 2020, the unemployment rate for Washington (WA) was higher than that of Wisconsin (WI).


☐ True

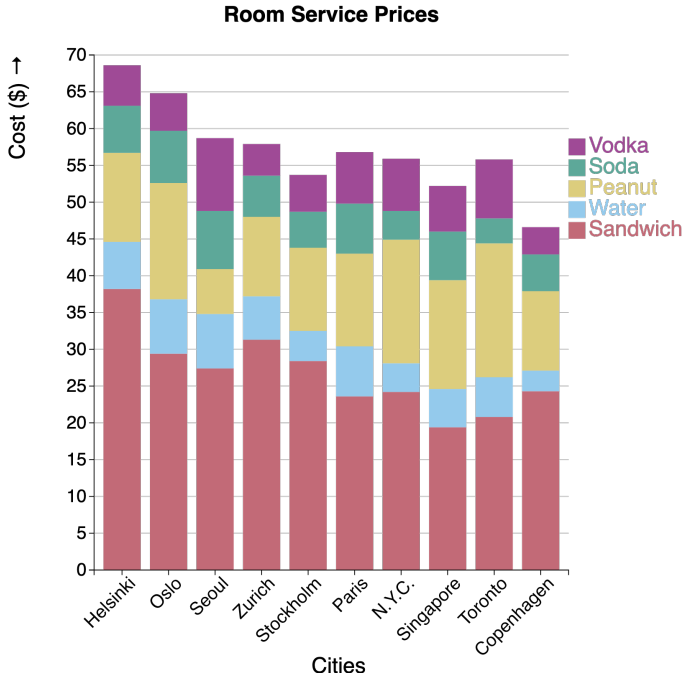
☐ False

5 What is the approximate global smartphone market share of Samsung?



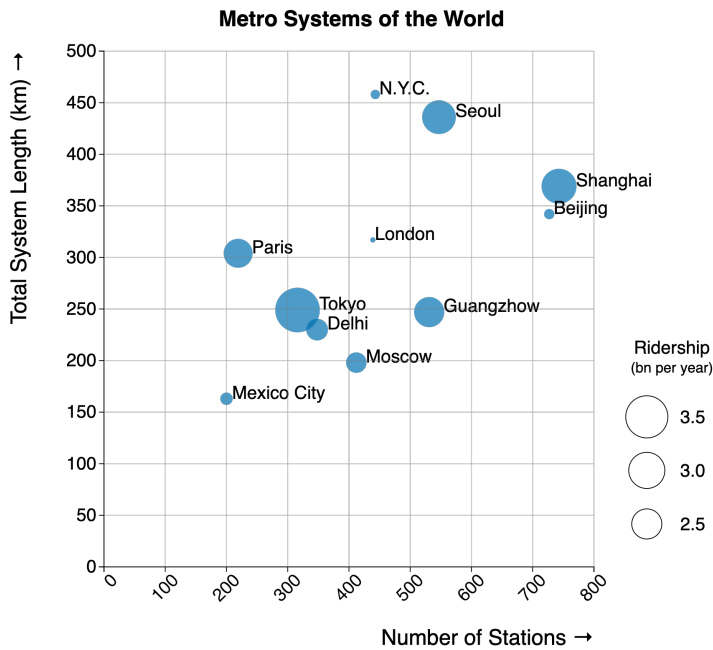
- ☐ 17.6%
- ☐ 10.9%
- ☐ 25.3%
- ☐ 35.2%

7 What is the cost of peanuts in Seoul?



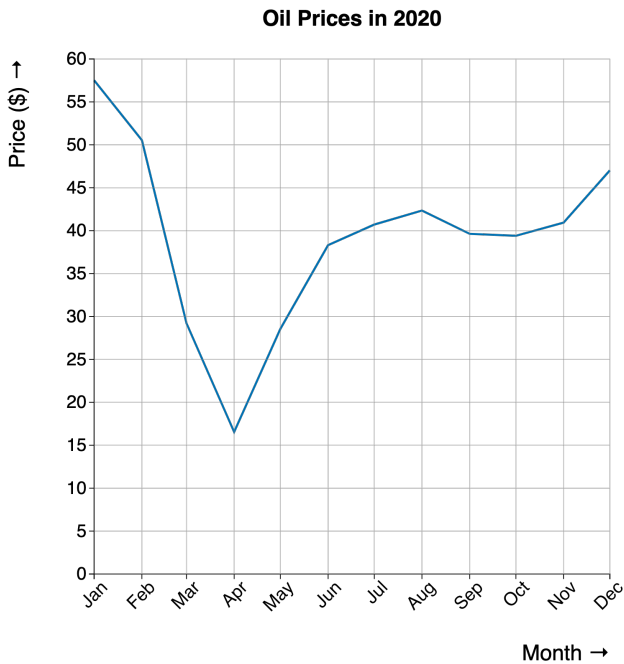
- ☐ \$5.2
- ☐ \$7.5
- ☐ \$6.1
- ☐ \$4.5

6 Which has the largest number of metro stations?



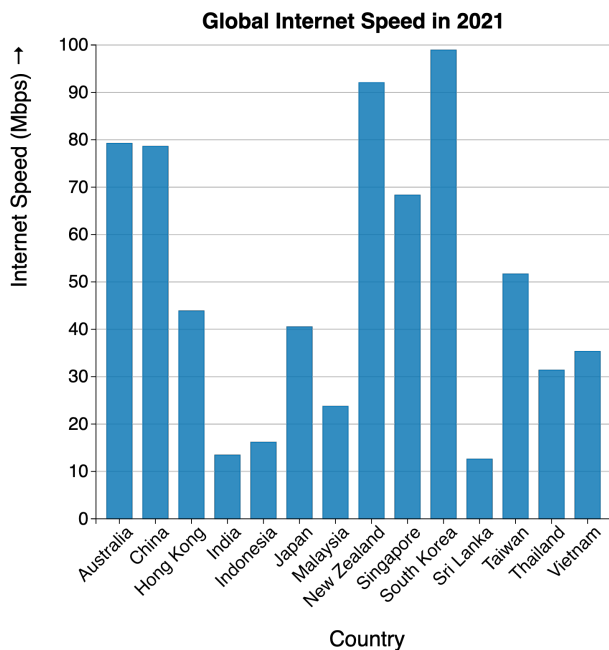
- ☐ Beijing
- ☐ London
- ☐ Shanghai
- ☐ Seoul

8 What was the price of a barrel of oil in February 2020?



- ☐ \$50.54
- ☐ \$42.34
- ☐ \$47.02
- ☐ \$43.48

9 What is the average internet speed in Japan?

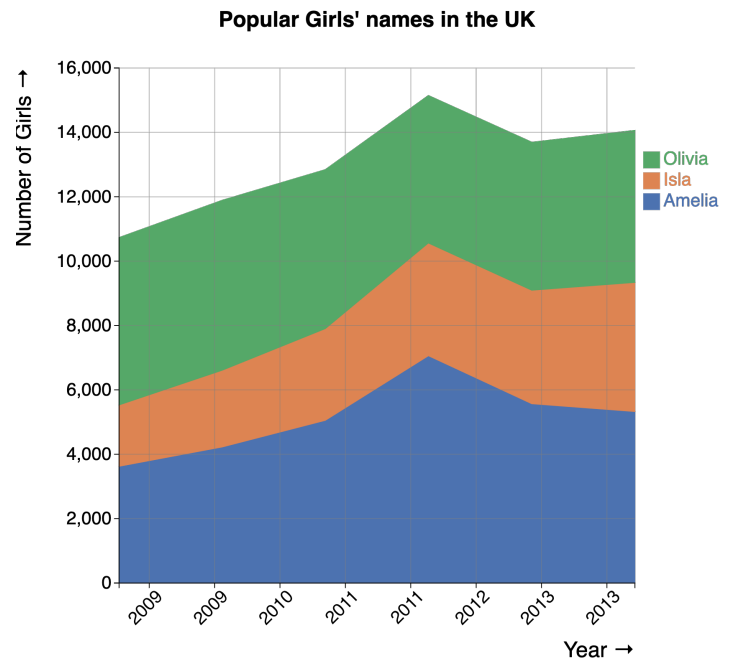

☐ 42.30 Mbps

☐ 35.25 Mbps

☐ 40.51 Mbps

☐ 16.16 Mbps

11 What was the ratio of girls named "Isla" to girls named "Amelia" in 2012 in the UK?

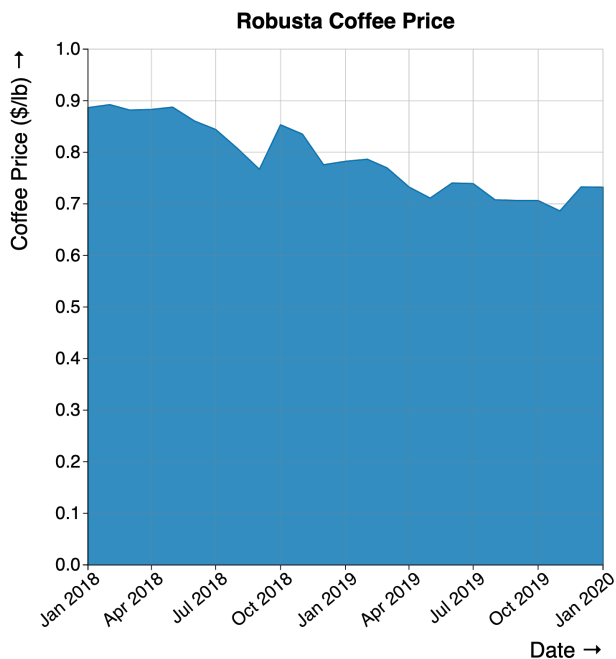

☐ 1 to 1

☐ 1 to 3

☐ 1 to 2

☐ 1 to 4

10 What was the average price of a pound of coffee in October 2019?

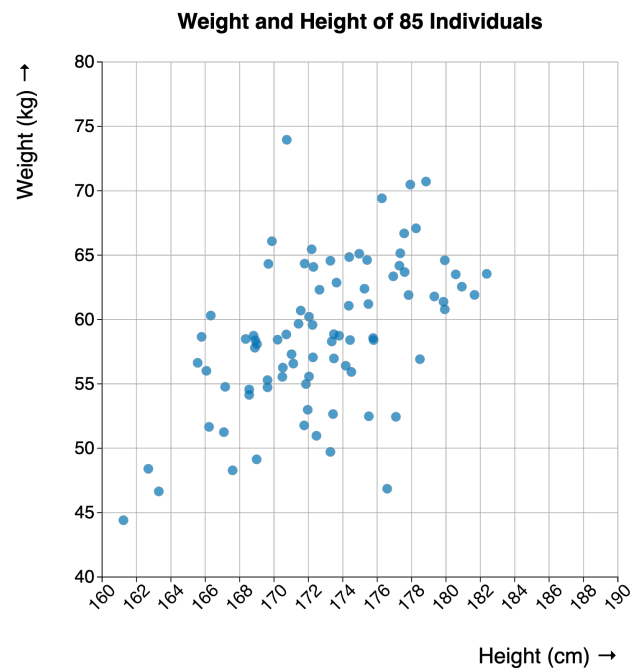

☐ \$0.71

☐ \$0.80

☐ \$0.90

☐ \$0.63

12 There is a negative relationship between the height and weight of the 85 males.


☐ True

☐ False

**Answer Key.**

Q1	False
Q2	Great Britain
Q3	30 - 40 Km
Q4	True
Q5	17.6 %
Q6	Shanghai
Q7	\$6.1
Q8	\$50.54
Q9	40.51 Mbps
Q10	\$0.71
Q11	1 to 2
Q12	False